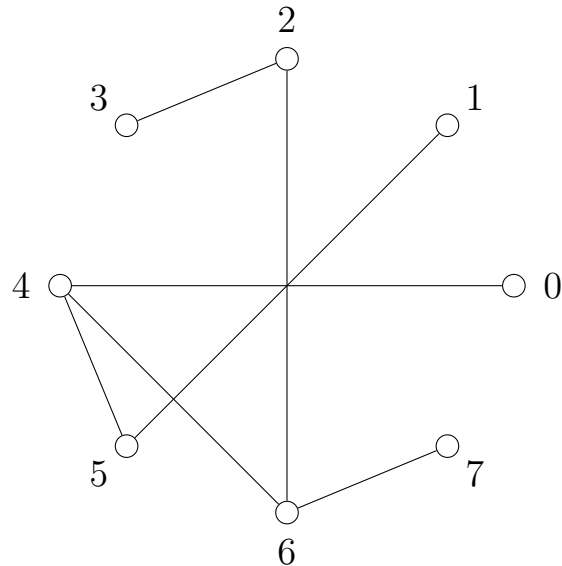


姓名 Name : _____ 學號 Student ID # : _____
Quiz 2 MATH 203: Discrete Mathematics I


Let T be the labeled tree as shown below.



Find the Prüfer code of T .

Check code = (sum of all digits of your answer) mod 10

Solution.



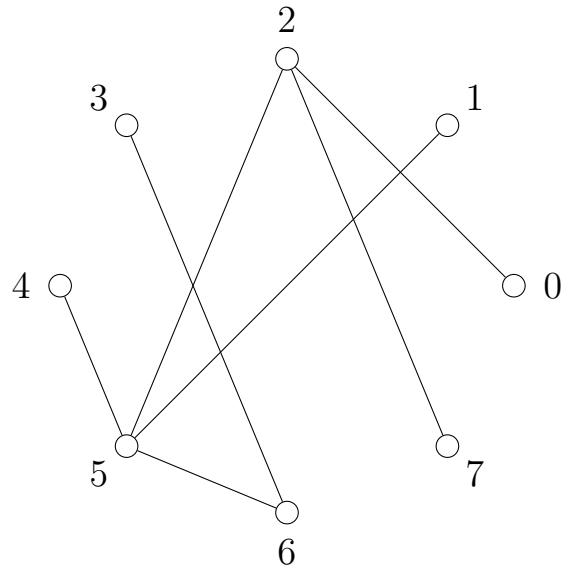
Indicating your answer by **underlining it** or **circling it**.
Compute the **check code** and fill it into the **box on the right**.

check code

--

姓名 Name : _____ 學號 Student ID # : _____
Quiz 2 MATH 203: Discrete Mathematics I

Let T be the labeled tree as shown below.



Find the Prüfer code of T .

Check code = (sum of all digits of your answer) mod 10

Solution.

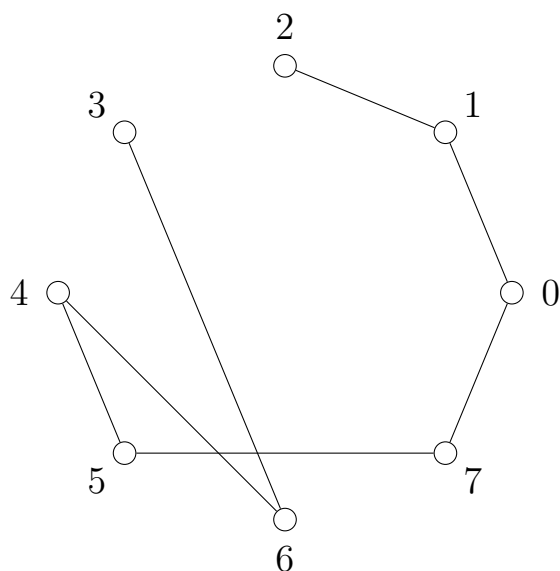


Indicating your answer by **underlining it** or **circling it**.
Compute the **check code** and fill it into the **box on the right**.

check code

姓名 Name : _____ 學號 Student ID # : _____
Quiz 2 MATH 203: Discrete Mathematics I


Let T be the labeled tree as shown below.



Find the Prüfer code of T .

Check code = (sum of all digits of your answer) mod 10

Solution.



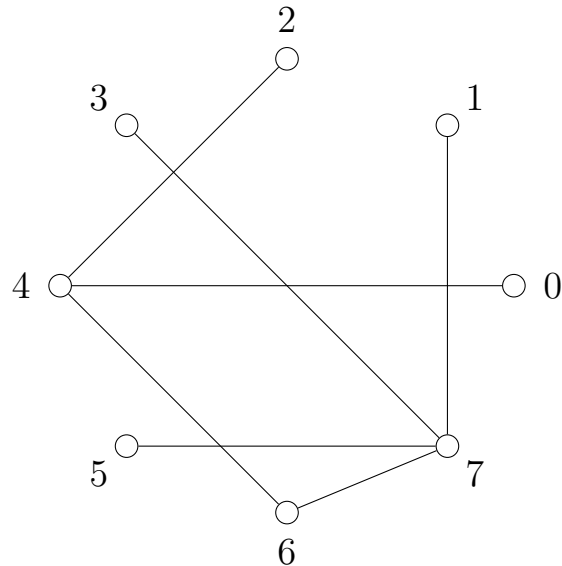
Indicating your answer by **underlining it** or **circling it**.
Compute the **check code** and fill it into the **box on the right**.

check code

--

姓名 Name : _____ 學號 Student ID # : _____
Quiz 2 MATH 203: Discrete Mathematics I

Let T be the labeled tree as shown below.



Find the Prüfer code of T .

Check code = (sum of all digits of your answer) mod 10

Solution.



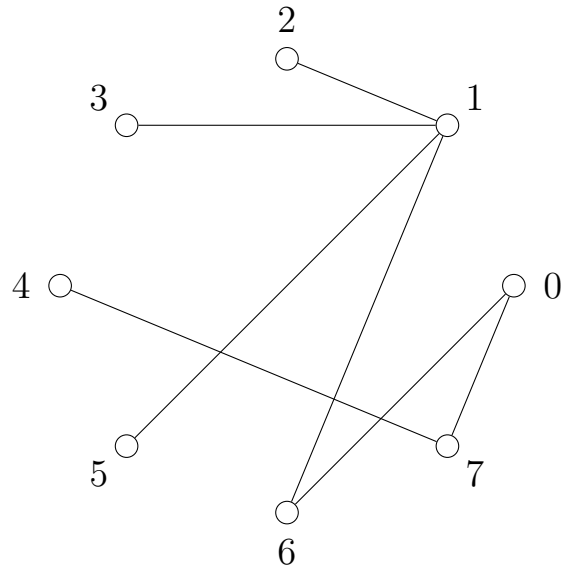
Indicating your answer by **underlining it** or **circling it**.
Compute the **check code** and fill it into the **box on the right**.

check code

--

姓名 Name : _____ 學號 Student ID # : _____
Quiz 2 MATH 203: Discrete Mathematics I

Let T be the labeled tree as shown below.



Find the Prüfer code of T .

Check code = (sum of all digits of your answer) mod 10

Solution.



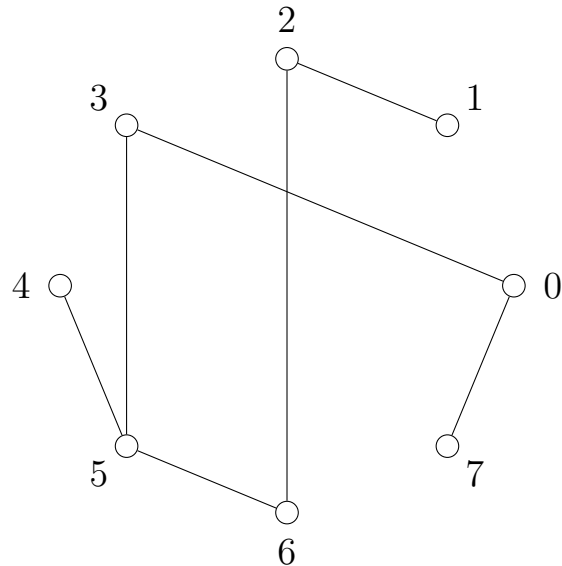
Indicating your answer by **underlining it** or **circling it**.
Compute the **check code** and fill it into the **box on the right**.

check code

--

姓名 Name : _____ 學號 Student ID # : _____
Quiz 2 MATH 203: Discrete Mathematics I

Let T be the labeled tree as shown below.



Find the Prüfer code of T .

Check code = (sum of all digits of your answer) mod 10

Solution.



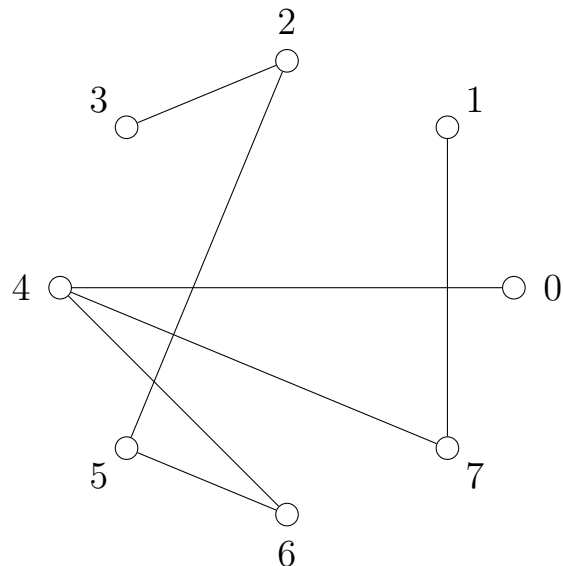
Indicating your answer by **underlining it** or **circling it**.
Compute the **check code** and fill it into the **box on the right**.

check code

--

姓名 Name : _____ 學號 Student ID # : _____
Quiz 2 MATH 203: Discrete Mathematics I


Let T be the labeled tree as shown below.



Find the Prüfer code of T .

Check code = (sum of all digits of your answer) mod 10

Solution.



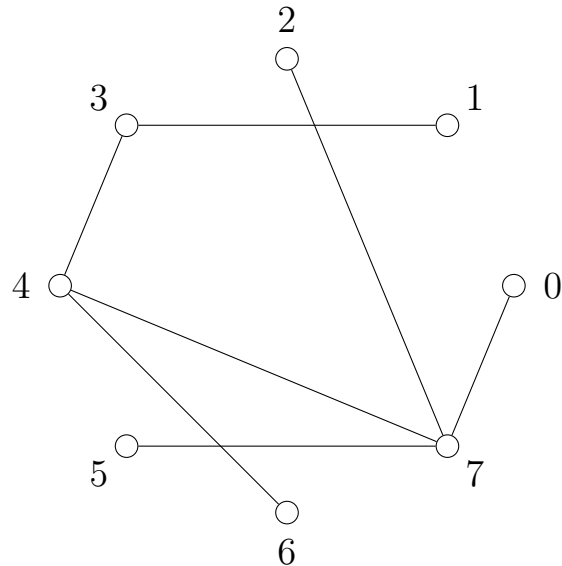
Indicating your answer by **underlining it** or **circling it**.
Compute the **check code** and fill it into the **box on the right**.

check code

--

姓名 Name : _____ 學號 Student ID # : _____
Quiz 2 MATH 203: Discrete Mathematics I


Let T be the labeled tree as shown below.



Find the Prüfer code of T .

Check code = (sum of all digits of your answer) mod 10

Solution.



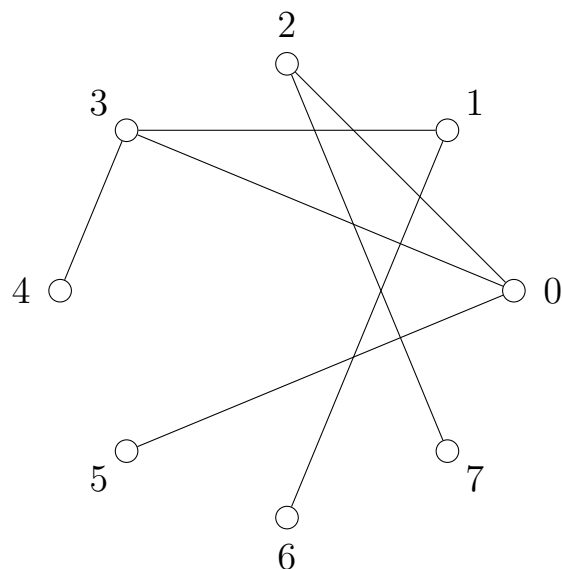
Indicating your answer by **underlining it** or **circling it**.
Compute the **check code** and fill it into the **box on the right**.

check code

--

姓名 Name : _____ 學號 Student ID # : _____
Quiz 2 MATH 203: Discrete Mathematics I

Let T be the labeled tree as shown below.



Find the Prüfer code of T .

Check code = (sum of all digits of your answer) mod 10

Solution.



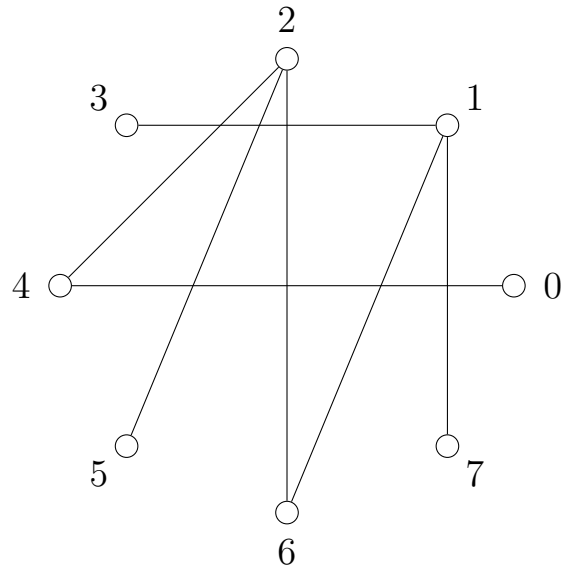
Indicating your answer by **underlining it** or **circling it**.
Compute the **check code** and fill it into the **box on the right**.

check code

--

姓名 Name : _____ 學號 Student ID # : _____
Quiz 2 MATH 203: Discrete Mathematics I


Let T be the labeled tree as shown below.



Find the Prüfer code of T .

Check code = (sum of all digits of your answer) mod 10

Solution.



Indicating your answer by **underlining it** or **circling it**.
Compute the **check code** and fill it into the **box on the right**.

check code

--